

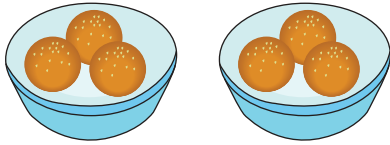
Name : _____

Equal Groups: Multiplication Sentence

Complete-L151

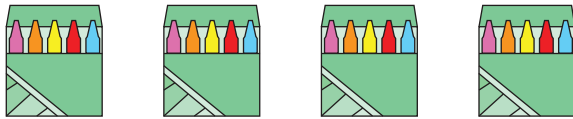
Complete the multiplication equation that describes each model.

1)




$$\square \times 3 = 6$$

2)




$$4 \times \square = 20$$

3)



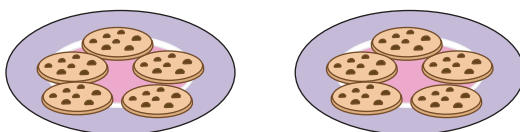
$$\square \times 4 = 12$$

4)



$$2 \times \square = 4$$

5)



$$\square \times 5 = 10$$